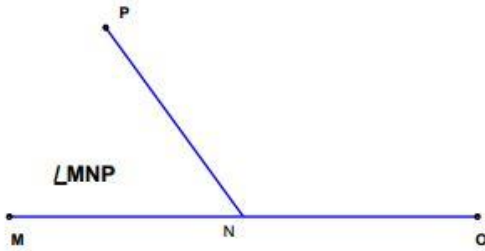


Name: \_\_\_\_\_

# Angle Measurement Practice

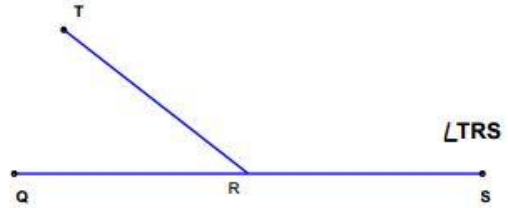
Measure the Angle to the Nearest Degree.

1 )



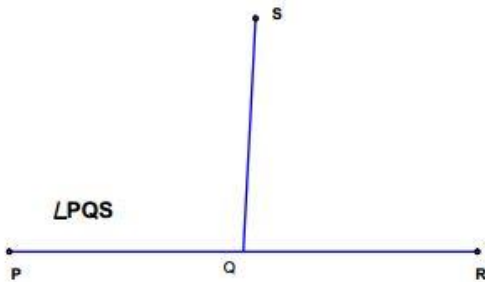
Angle MNP = \_\_\_\_\_

2 )



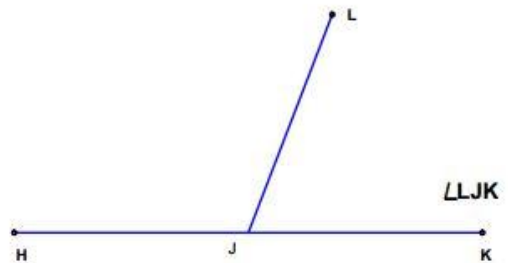
Angle TRS = \_\_\_\_\_

3 )



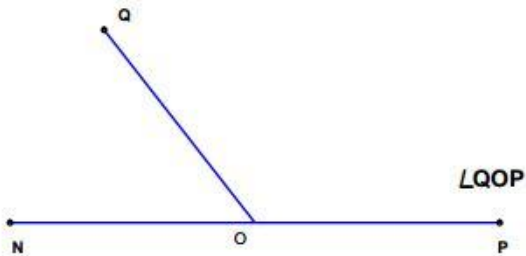
Angle PQS = \_\_\_\_\_

4 )



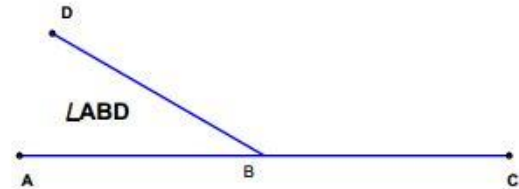
Angle LJK = \_\_\_\_\_

5 )



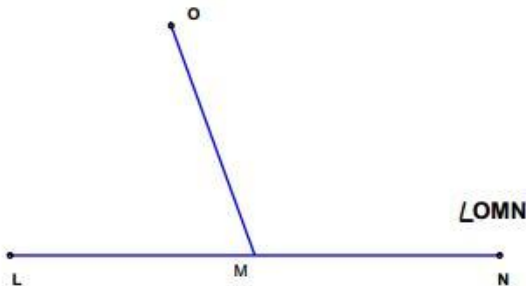
Angle QOP = \_\_\_\_\_

6 )



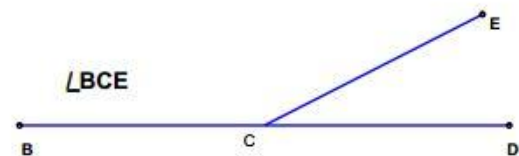
Angle ABD = \_\_\_\_\_

7 )



Angle OMN = \_\_\_\_\_

8 )



Angle BCE = \_\_\_\_\_